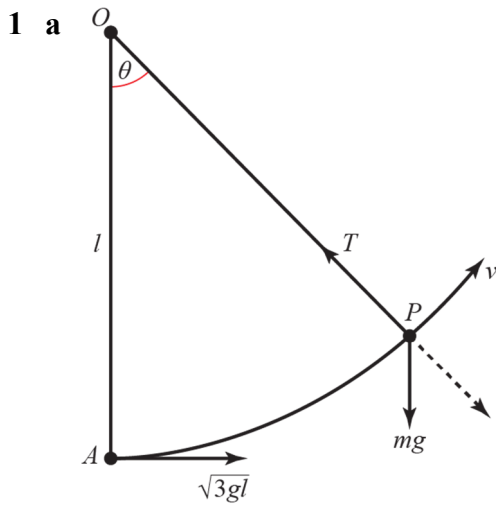


Exercise 4E



Conservation of energy.

$$\frac{1}{2}mu^2 - \frac{1}{2}mv^2 = mgl(1 - \cos \theta)$$

$$\frac{1}{2}mv^2 = \frac{1}{2}mu^2 - mgl(1 - \cos \theta)$$

$$v^2 = 3gl - 2gl(1 - \cos \theta) = gl(1 + 2 \cos \theta)$$

Resolving towards the centre of the circle:

$$T - mg \cos \theta = \frac{mv^2}{l}$$

$$T = mg \cos \theta + \frac{mgl}{l}(1 + 2 \cos \theta) = mg + 3mg \cos \theta$$

b String slack $\Rightarrow T = 0 \Rightarrow \cos \theta = -\frac{1}{3} \Rightarrow \text{height} = l + \frac{l}{3} = \frac{4l}{3}$

c When the string goes slack, $v^2 = gl \left(1 + 2 \times \left(-\frac{1}{3} \right) \right) = \frac{gl}{3}$

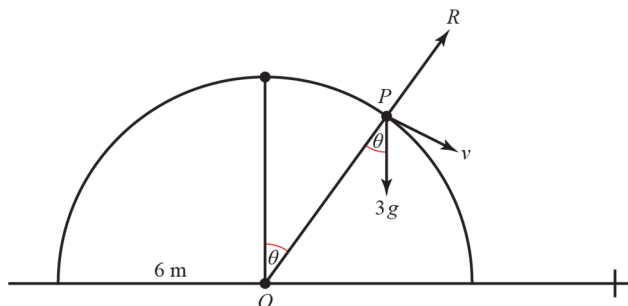
So horizontal component of velocity $= \frac{1}{3} \sqrt{\frac{gl}{3}}$

Using energy, if the maximum additional height is h , then

$$mgh + \frac{1}{2}m \times \left(\frac{1}{3} \sqrt{\frac{gl}{3}} \right)^2 = \frac{1}{2}m \left(\frac{gl}{3} \right)$$

$$h = \frac{l}{6} - \frac{l}{6 \times 9} = \frac{8l}{54} = \frac{4l}{27}, \text{ height above } A = \frac{4l}{3} + \frac{4l}{27} = \frac{40l}{27}$$

2 a

Conservation of energy from top to P :

$$mg \times 6 = mg \times 6 \cos \theta + \frac{1}{2}mv^2$$

$$v^2 = 12g(1 - \cos \theta)$$

Resolving towards O :

$$3g \cos \theta - R = \frac{mv^2}{r} = \frac{12 \times 3g}{6}(1 - \cos \theta)$$

$$9g \cos \theta - 6g = R$$

b $R = 0 \Rightarrow \cos \theta = \frac{2}{3}, \theta \approx 48^\circ$

$$2 \text{ c } v^2 = 12g \times \frac{1}{3} = 4g$$

$$\text{Speed} \rightarrow v \cos \theta, \quad \downarrow v \sin \theta + gt$$

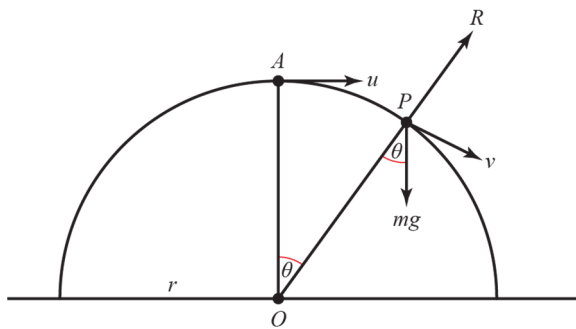
$$\text{Distance} \rightarrow v \cos \theta t, \quad \downarrow v \sin \theta t + \frac{1}{2}gt^2 = 6 \times \frac{2}{3} = 4$$

$$2\sqrt{g} \frac{\sqrt{5}}{3}t + \frac{g}{2}t^2 = 4, 4.9t^2 + \frac{14}{3}t - 4 = 0$$

$$t \approx 0.545 \dots$$

$$\text{Total horizontal distance from } O = 6 \sin \theta + \sqrt{4g} \cos \theta \times t \approx 6.7 \text{ m}$$

3 a



Conservation of energy:

$$\frac{1}{2}mu^2 + mgr = \frac{1}{2}mv^2 + mgr \cos \theta$$

$$\frac{rg}{8} + rg = \frac{9rg}{8} = \frac{1}{2}v^2 + rg \cos \theta$$

$$v^2 = \frac{9rg}{4} - 2rg \cos \theta$$

$$\text{b Resolving towards } O: mg \cos \theta - R = \frac{mv^2}{r} = mg \left(\frac{9}{4} - 2 \cos \theta \right)$$

$$R = 0 \Rightarrow 3mg \cos \theta = mg \times \frac{9}{4}, \cos \theta = \frac{3}{4}$$

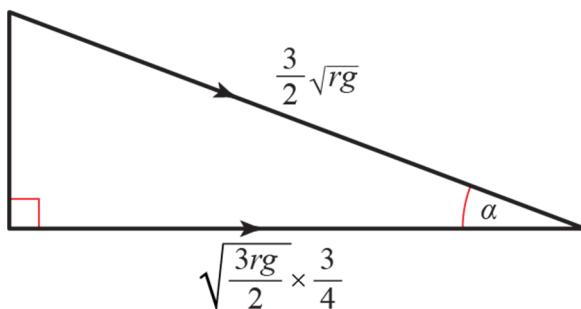
$$\text{c } v^2 = \frac{9rg}{4} - 2rg \times \frac{3}{4} = \frac{3rg}{4}, v = \sqrt{\frac{3rg}{4}}$$

d Conservation of energy from A to the table:

$$\frac{1}{2}mv^2 = \frac{1}{2}mu^2 + mgr$$

$$v^2 = u^2 + 2gr = \frac{rg}{4} + 2gr = \frac{9rg}{4}, v = \frac{3}{2}\sqrt{rg} \text{ m s}^{-1}$$

e



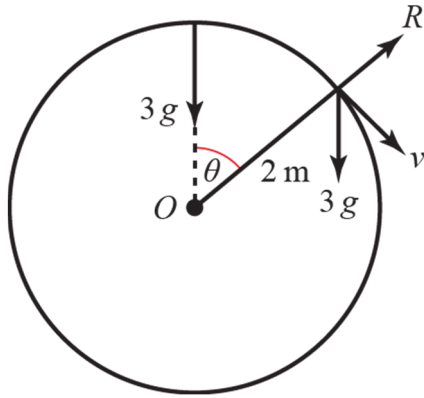
After leaving the hemisphere the horizontal component of the velocity remains constant.

Direction is angle α to the ground,

$$\cos \alpha = \frac{\sqrt{\frac{3rg}{4}} \times \frac{3}{4}}{\frac{3}{2} \times \sqrt{rg}} = \frac{\sqrt{3}}{4}$$

$$\alpha = 64^\circ$$

4 a



Conservation of energy:

$$mgr = \frac{1}{2}mv^2 + mgr \cos \theta$$

$$v^2 = 2mgr(1 - \cos \theta) = 4mg(1 - \cos \theta)$$

Resolving towards O :

$$3g \cos \theta - R = \frac{3v^2}{2} = \frac{3 \times 4g(1 - \cos \theta)}{2}$$

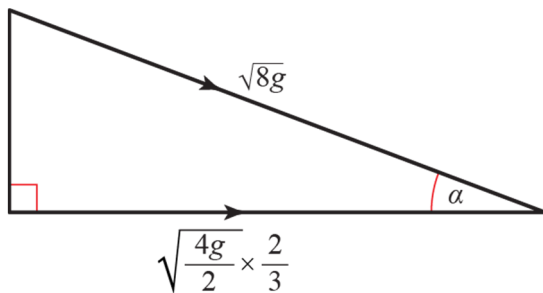
$$R = 0 \Rightarrow 9g \cos \theta = 6g, \quad \cos \theta = \frac{2}{3}$$

$$\theta \approx 48^\circ$$

b Using conservation of energy from the highest point to the ground:

$$\frac{1}{2}mv^2 = mgh = mg \times 4, \quad v = \sqrt{8g} \text{ when } P \text{ hits the ground.}$$

$$\text{When } P \text{ leaves the sphere } v^2 = 4mg(1 - \cos \theta) = 4mg \times \frac{1}{3}, \quad v = \sqrt{\frac{4mg}{3}}$$

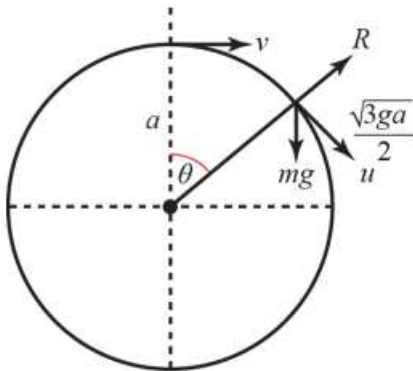


After leaving the hemisphere the horizontal component of the velocity remains constant. Direction is angle α to the ground,

$$\cos \alpha = \frac{\sqrt{\frac{4g}{3}} \times \frac{2}{3}}{\sqrt{8g}} = \frac{2}{3} \times \sqrt{\frac{1}{6}}$$

$$\alpha = 74^\circ$$

5 a



Forces acting along the radius:

$$mg \cos \theta - R = \frac{mv^2}{r} = \frac{m \times 3ga}{4a} = \frac{3mg}{4}$$

$$R = 0 \Rightarrow \cos \theta = \frac{3}{4}$$

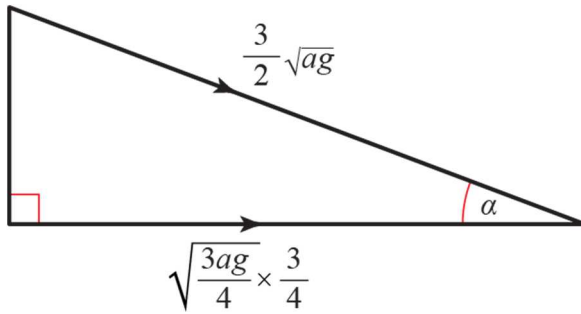
$$\text{Distance fallen} = a - a \cos \theta = \frac{a}{4}$$

b Conservation of energy from the top to the point where the particle leaves the sphere:

$$mg \frac{a}{4} = \frac{1}{2}m \times \frac{3ga}{4} - \frac{1}{2}mu^2, \quad \frac{1}{2}u^2 = \frac{3ga}{8} - \frac{ga}{4} = \frac{ga}{8}, \quad u^2 = \frac{ga}{4}, \quad u = \sqrt{\frac{ga}{4}}$$

- 5 c Looking at the energy at the top and level with the centre:

$$\frac{1}{2}mv^2 = \frac{1}{2}mu^2 + mga = \frac{1}{2}m\frac{ga}{4} + mga, v^2 = \frac{9ga}{4}, v = \frac{3}{2}\sqrt{ga} = \sqrt{\frac{9ga}{4}}$$

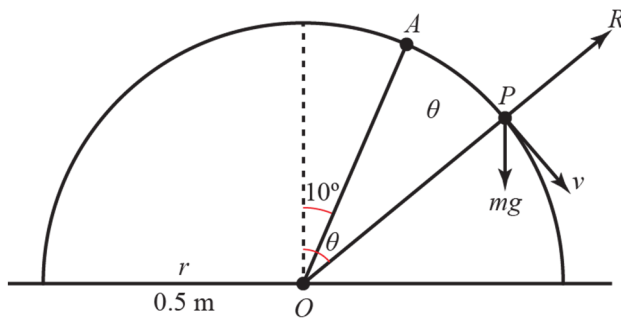


After leaving the hemisphere the horizontal component of the velocity remains constant.

$$\text{Direction is } \alpha, \cos \alpha = \frac{\sqrt{\frac{3ag}{4}} \times \frac{3}{4}}{\frac{3}{2} \times \sqrt{ag}} = \frac{\sqrt{3}}{4}$$

$$\alpha = 64^\circ \text{ to the horizontal}$$

- 6 a



Conservation of energy:

$$\frac{1}{2}mv^2 + mg \frac{1}{2} \cos \theta = mg \frac{1}{2} \cos 10^\circ$$

$$v^2 = g(\cos 10^\circ - \cos \theta)$$

Forces acting towards O:

$$mg \cos \theta - R = \frac{mv^2}{0.5} = 2mv^2$$

$$R = 0 \Rightarrow g \cos \theta = 2v^2 = 2g(\cos 10^\circ - \cos \theta) \Rightarrow 3g \cos \theta = 2g \cos 10^\circ$$

$$\cos \theta = \frac{2}{3} \cos 10^\circ, \theta \approx 49^\circ$$

- b The particle will fall through a parabolic arc (projectile motion) towards the surface in the positive x direction.

- 7 a Total height lost

$$= 5(1 - \cos 70^\circ) + 7(1 - \cos 40^\circ) + 0.5$$

$$= 5.427\dots$$

$$= 5.4 \text{ m}$$

Conservation of energy:

$$\frac{1}{2} \times 2 \times v^2 = 2 \times g \times 5.427\dots$$

$$\Rightarrow v = 10.3 \text{ ms}^{-1}$$

- b At R: $\frac{1}{2} \times 2 \times v^2 = 2g(12 - 5 \cos 70^\circ - 7 \cos 40^\circ)$

$$\Rightarrow v^2 = 96.58$$

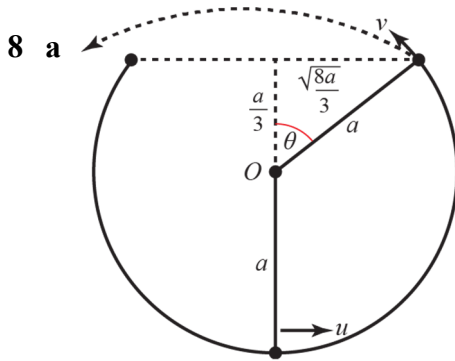
R (\nearrow) towards B:

$$mg \cos \theta - R = \frac{mv^2}{7}$$

$$R = 2g \cos 40^\circ - \frac{2v^2}{7} = -12.6 < 0$$

This is impossible, so the particle must have lost contact with the chute before this point.

7 c In reality, energy is lost due to friction between the laundry bag and the chute.



$$\text{K.E.} + \text{P.E. at lowest point} = \frac{1}{2}mu^2$$

$$\text{K.E.} + \text{P.E. at rim} = \frac{1}{2}mv^2 + mg \times \frac{4a}{3}$$

$$\Rightarrow u^2 = v^2 + \frac{8ga}{3}$$

After the particle leaves the bowl:

The vertical speed when the particle returns to the level of the rim of the bowl is $v \sin \theta$

downwards, so using $v = u + at$, $-v \sin \theta = v \sin \theta - gt$, $t = \frac{2v \sin \theta}{g}$

The horizontal distance covered in this time is $v \cos \theta \times \frac{2v \sin \theta}{g}$

The width of the top of the bowl $= 2 \times \frac{\sqrt{8}}{3}a = \frac{4\sqrt{2}a}{3}$

$$\Rightarrow 2 \frac{v^2}{g} \sin \theta \cos \theta > \frac{4\sqrt{2}a}{3}, v^2 \times \frac{\sqrt{8}}{3} \times \frac{1}{3} > \frac{2\sqrt{2}ag}{3}, v^2 > 3ag$$

$$\Rightarrow u^2 > 3ag + \frac{8ga}{3} = \frac{17ga}{3}$$

so minimum value of u is $\sqrt{\frac{17ag}{3}}$

b Energy would be lost due to the frictional force acting on the marble, requiring a larger initial speed for the marble to leave the bowl.